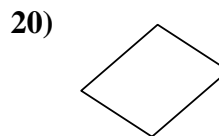
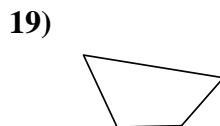
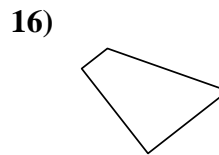
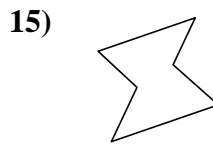
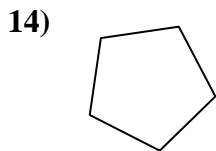
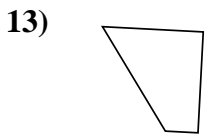
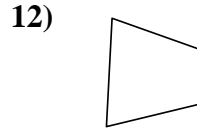
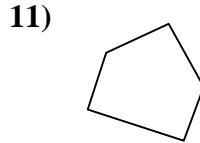
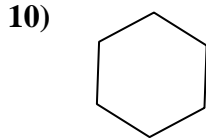
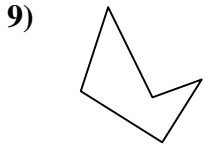
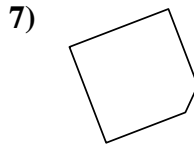
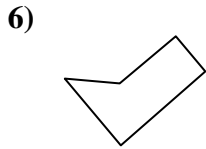
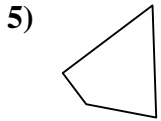
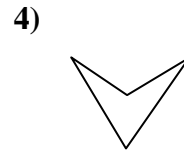
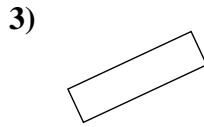
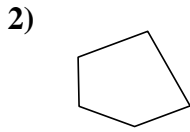
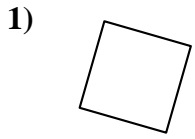




Determine if the shape shown is a quadrilateral (yes) or not (no).

Answers

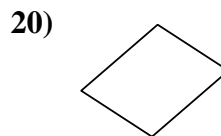
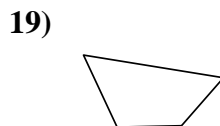
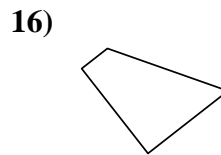
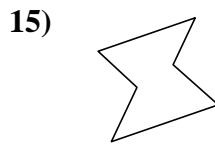
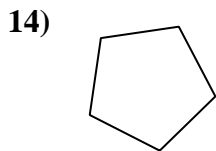
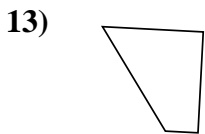
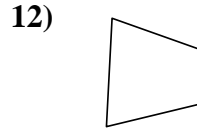
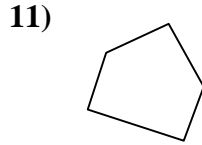
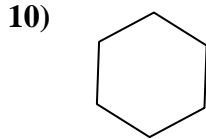
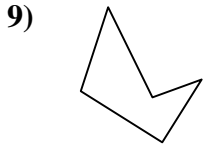
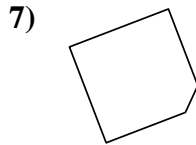
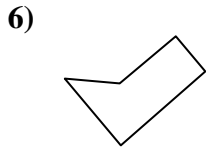
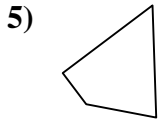
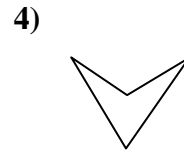
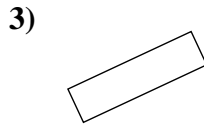
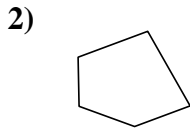
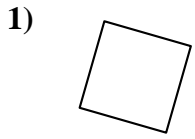


- 1. _____
- 2. _____
- 3. _____
- 4. _____
- 5. _____
- 6. _____
- 7. _____
- 8. _____
- 9. _____
- 10. _____
- 11. _____
- 12. _____
- 13. _____
- 14. _____
- 15. _____
- 16. _____
- 17. _____
- 18. _____
- 19. _____
- 20. _____



Determine if the shape shown is a quadrilateral (yes) or not (no).

Answers



1. yes

2. no

3. yes

4. yes

5. yes

6. no

7. no

8. no

9. no

10. no

11. no

12. yes

13. yes

14. no

15. no

16. yes

17. yes

18. no

19. yes

20. yes